

MONDAY

Patterning and Algebra

1. What number comes next?

21, 23, 25, 27, 29 _____

2. Which number sentence as the same answer as $22 - 10$?

A. $6 + 2$ B. $8 + 4$ C. $10 + 1$

3. What is the missing number?


$7 + \underline{\hspace{2cm}} = 18$

4. What number comes next?

120, 110, 100, _____

5. What is the next number if the pattern rule is add 7?

14, _____



TUESDAY

Number Sense

1.
$$\begin{array}{r} 16 \\ + 47 \\ \hline \end{array}$$

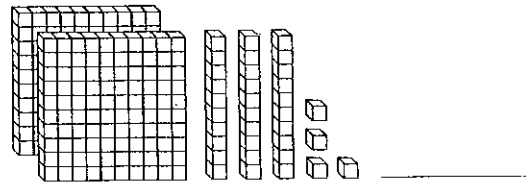
2. Which number is even?

35 90

3. Count forwards by 2's.

8, _____, _____, _____, _____

4. What is the number?



5. Compare and write $>$, $<$ or $=$ in the .



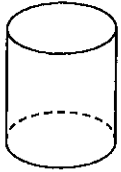
WEDNESDAY

Geometry and Spatial Sense

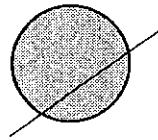
1. Name a shape that has 4 sides.

2. How many vertices does a hexagon have?

3. How many faces?



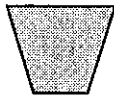
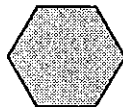


4. Does this shape show a line of symmetry?



yes or no


5. Circle the quadrilaterals.



THURSDAY

Measurement

1. What time is it?



2. The time is 9 am. What time will it be in 4 hours?

A. 1:00 pm B. 1:15 pm C. 1:30pm

3. What is the perimeter?



_____ units

4. What is the area?



_____ square units

5. What would be the best unit of measurement to find the height of a school?

A. mm

B. cm

C. m


Here are the results of a Favourite Breakfast Food Survey
Complete the chart and answer the questions about the results.

Favourite Breakfast Foods	Tally	Number
Cereal		5
Eggs		15
Pancakes		20
Grilled Cheese		15



1. What was the most popular breakfast food? _____
2. How many people liked either cereal or pancakes? _____
3. Which breakfast food did people like the same? _____

BRAIN STRETCH



$$\begin{array}{r} 1. \ 718 \\ +288 \\ \hline \end{array}$$

$$\begin{array}{r} 2. \ 835 \\ -299 \\ \hline \end{array}$$

$$\begin{array}{r} 3. \ 287 \\ +634 \\ \hline \end{array}$$

$$\begin{array}{r} 4. \ 544 \\ -198 \\ \hline \end{array}$$