

MONDAY

Patterning and Algebra

1. Find the missing number.

87, 77, 67, _____, 47, 37

2. Which number sentence has the same quotient as $30 \div 6$?

A. $25 \div 5$ B. $14 \div 2$ C. $24 \div 6$

3. What is the missing number?

$9 + \underline{\hspace{1cm}} = 18$

4. What number comes next?

335, 340, 345, _____

5. What is the next number if the pattern rule is subtract 1?

87, _____

TUESDAY

Number Sense

1. Name the numeral for:

$6000 + 500 + 20 + 2$

2. How many ones in 4531?

3. Count forwards by 2's.


18, _____, _____, _____, _____

4. $6 + 6 + 6 =$

5. Which creature is ninth in the row?



A.  B.  C. 



WEDNESDAY


Geometry and Spatial Sense

1. Draw a trapezoid.

2. How many lines of symmetry does this number have?

9

3. How many faces?




4. Does this shape have a line of symmetry?



yes or no

5. What 3D figure could be made from these pieces?

A. cone B. cube C. pyramid



THURSDAY

Measurement

1. What time is it?



2. What month comes after July?

3. What is the perimeter?



_____ units

4. What is the area?



_____ square units

5. What would be the best unit of measurement to find the distance between two cities?

A. km

B. m

C. cm


The grade 3 class took a survey on Favourite Farm Animals. Complete the chart and answer the questions.

Animal	Tally	Number
Chickens		
Cows		
Pigs		
Horses		
Sheep		

1. How many students participated in the survey? _____
2. Which animal was the most popular? _____
3. How many more people chose horses than cows? _____
4. Which animals were chosen the same? _____
5. How many people chose either chickens or pigs? _____



BRAIN STRETCH



Mathew had 5 book shelves. On each shelf he put 10 books. How many books were on the book shelves altogether?