

# MONDAY

## Patterning and Algebra

1. Find the missing number.

111, 121, 131, \_\_\_\_\_, 151, 161

2. What number sentence has the same answer as  $3 \times 3$  ?

A.  $8 + 2$     B.  $8 + 1$     C.  $10 - 6$

3. What is the missing number?

\_\_\_\_\_ - 3 = 5

4. Is this a growing, shrinking or repeating pattern?



5. What is the next number if the pattern rule is add 8?

54, \_\_\_\_\_

# TUESDAY

## Number Sense

1.  $5 + 2 + 6 =$

2. Which number is odd?

188    361

3. Count forwards by 10's.

125, \_\_\_\_\_, \_\_\_\_\_, \_\_\_\_\_

4. Circle  $\frac{2}{4}$  of the group.



5. What number comes just before 168?



# WEDNESDAY

## Geometry and Spatial Sense


1. Draw a quadrilateral.

\_\_\_\_\_

2. Name a shape that is not a polygon.

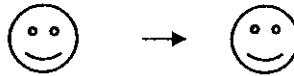
\_\_\_\_\_

3. How many edges?



\_\_\_\_\_

4. Look at the shapes. Choose flip, slide or turn.

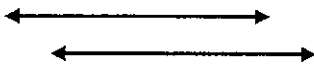


A. flip

B. slide

C. turn

5. Classify the following pair of lines.




A. parallel   B. intersecting   C. perpendicular

# THURSDAY

## Measurement

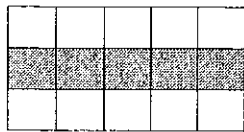
1. What time is it?



2. What month comes after January?


\_\_\_\_\_

3. What is the perimeter?



\_\_\_\_\_ units

4. What is the area?



\_\_\_\_\_ square units

5. How much water would a bath tub hold? Circle the better estimate.



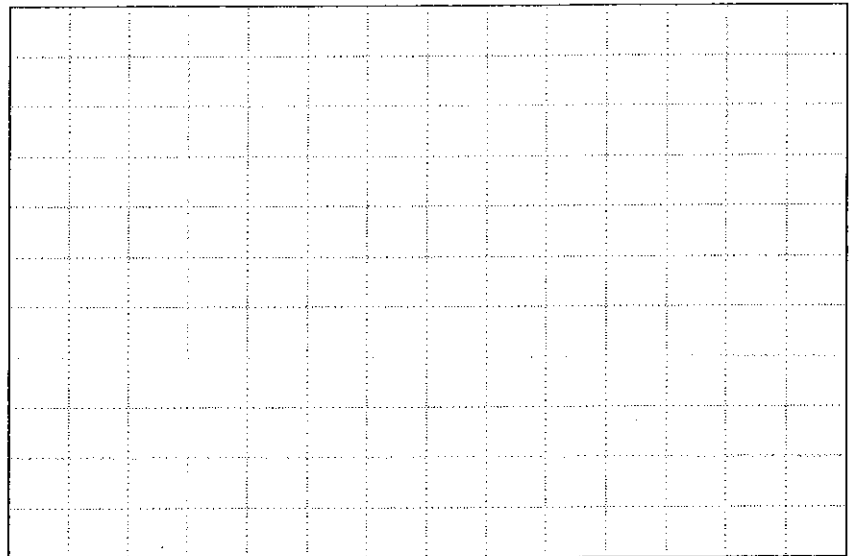
A. 1 L

B. 100 L

Use data from the chart to make a bar graph. Make sure you label!

Favourite Season Survey

Season	Number of Votes
Spring	5
Summer	15
Autumn	10
Winter	15



1. List the seasons in order from the most votes to the fewest votes.


\_\_\_\_\_

2. How many more people chose winter than chose spring? \_\_\_\_\_

3. How many people chose either summer or autumn? \_\_\_\_\_

4. What was the least popular season? \_\_\_\_\_

5. What was the most popular season? \_\_\_\_\_



## BRAIN STRETCH



John collected 234 stamps. Avita collected 356 stamps.  
How many stamps did they collect altogether?