

MONDAY

Patterning and Algebra

1. What number comes next?

345, 346, 347, _____

2. Which number sentence has the same difference as $17 - 5$?

A. $20 - 8$ B. $18 - 4$ C. $14 - 3$

3. What is the missing number?

$16 - \underline{\quad} = 8$

4. What number comes next?

72, 65, 58, 51, _____

5. What is the next number if the pattern rule is add 9?

34, _____



TUESDAY

Number Sense

1. What number is 10 less than 57?

2. Which number is odd?

47 32

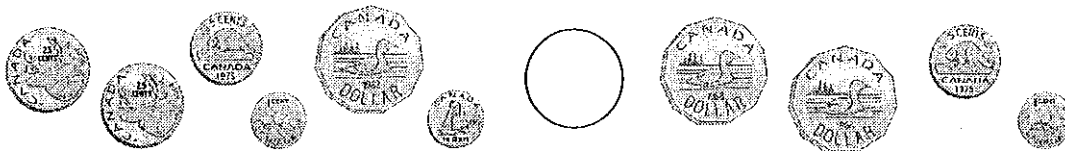
3. Count forwards by 5's.

30, _____, _____, _____, _____

4. Circle $\frac{1}{3}$ of the group.



5. Compare and write $>$, $<$ or $=$ in the .



WEDNESDAY

Geometry and Spatial Sense

1. Name a shape that has 5 sides.

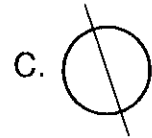
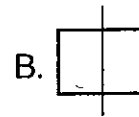
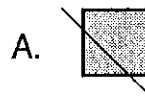
2. Are these shapes congruent?



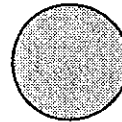
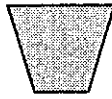
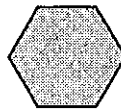

3. What 3D figure does this object look like?



4. Which shape does not show a line of symmetry?




5. Circle the polygons.



THURSDAY

Measurement


1. What time is it?



2. The time is 12:30 pm. What time will it be in 45 minutes?


A. 1:00 pm B. 1:15 pm C. 1:30 pm

3. What is the perimeter?



_____ units

4. What is the area?



_____ square units

5. What would be the best unit of measurement to find the width of a desk?

A. mm

B. cm

C. m

Here is a chart to show the number of students and desks in each grade three class.

Room Data	Ms. Apor	Mr. Patel	Mrs. Smith	Ms. Rocco
Students	25	22	24	25
Desks	25	20	24	27

1. Who needs more desks in their room? _____
2. Which two teachers have the same number of students? _____
3. Which teacher has more desks than they need? _____
4. Who has the least number of students? _____
5. Who has the most number of students? _____

BRAIN STRETCH



If a spider has eight legs, how many legs do 5 spiders have?

